

4 Exploring Magnets

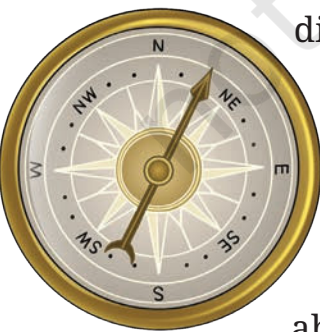


Reshma lives in a coastal town of Kerala and is very fond of writing short stories. Her grandmother loves listening to her stories, so Reshma was writing a new story to share with her grandmother on her 60th birthday.



0677CH04

The story was based on a ship carrying spices from Kerala for trade in the olden days. Reshma was aware that in those days, the sailors used stars to find directions at night. But in her story, a situation arose wherein the sailors got caught in a storm with an overcast sky and stars were not visible. Reshma could not take her story forward as she could not think of a way for sailors to find directions.



She searched for information on the internet and her school library. She learnt that the travellers used a device, known as a magnetic compass, for finding directions.

Reshma had seen pencil boxes and purses which had magnets to keep them closed. A writing board in her school also had a duster with a magnet. But she had never looked at those carefully. She now became curious to learn more about magnets and magnetic compasses.



Fig. 4.1: Some common items that have magnets attached to them

The magnets used by sailors in the olden days were based on naturally occurring magnets, known as lodestones which were discovered in ancient times. Later on, people found out that magnets could also be made from pieces of iron. Nowadays, we have magnets made of different materials. The magnets that you find in your school laboratory and those used in pencil boxes, stickers, toys are all artificial magnets (Fig. 4.1). The magnets can be of various shapes, some of which are shown in Fig. 4.2.



Fig. 4.2: Magnets of different shapes

4.1 Magnetic and Non-magnetic Materials

Activity 4.1: Let us explore

- ◆ Collect a few objects made of different materials and also a magnet.
- ◆ **Predict** which of the objects will stick to the magnet. Write your prediction in Table 4.1.
- ◆ Now hold a magnet in your hand and bring it near the objects one by one (Fig. 4.3). **Observe** which of the objects stick to the magnet.




Fig. 4.3: Identifying the materials attracted by a magnet

- ◆ Record your observations in Table 4.1.

Table 4.1: Identifying the materials attracted by a magnet

Name of the object	Material which the object is made of (plastic/wood/glass/iron/any other)	Attracted by the magnet (Yes/No)	
		Prediction	Observation
Pencil	Wood		
Eraser	Rubber		

Was your prediction correct for all objects? Which materials stuck to the magnet? What conclusion can you draw?

Through this activity, we found out that some of the objects were attracted to the magnet and stuck to it, while others were not. The materials which are attracted towards a magnet are called **magnetic materials**. The metal iron is a magnetic material. Nickel and cobalt are other metals that are also magnetic. Some of their combinations with other metals are also attracted towards magnets. The materials which are not attracted towards a magnet are called **non-magnetic materials**.

Which materials listed in Table 4.1 were found to be non-magnetic?

Do all parts of a magnet attract magnetic materials equally?



4.2 Poles of Magnet

Activity 4.2: Let us investigate

- ◆ Spread some iron filings (very small pieces of iron) on a sheet of paper.
- ◆ Place a bar magnet over them. Tap the paper and observe carefully what happens to the iron filings.

Do you observe anything special about the way they stick to the magnet? Do the iron filings stick all over the magnet uniformly? Or do the iron filings stick more at some places?

We find that maximum iron filings stick near the ends of the bar magnet, as shown in Fig. 4.4, while a very few iron filings stick at the remaining part of the magnet.



Fig. 4.4: Iron filings sticking to a bar magnet

If we repeat this activity with magnets of other shapes, do we get the same result?



These ends of the magnet are called the two poles of the magnet—the North pole and the South pole. Most of the iron filings stick to the poles of a magnet of any shape.

It is not possible to obtain a magnet with a single pole. If a magnet is broken into smaller pieces, North and South poles always exist in pairs even in the smallest piece of the magnet. A single North pole or a South pole cannot exist.

Can we find a magnet with a single pole?



4.3 Finding Directions

Activity 4.3: Let us experiment

- ◆ Suspend a bar magnet with a thread tied to the middle of the magnet as shown in Fig. 4.5. You may need to adjust the position of the string till the magnet is balanced horizontally.
- ◆ Now rotate the magnet gently in the horizontal direction and let it come to rest.
- ◆ Mark the position corresponding to the ends of the magnet on the ground (or on a piece of paper stuck to the ground). Join these two points on the ground with a line. This line indicates the direction along which the magnet comes to rest.
- ◆ Now again rotate the magnet by giving a gentle push at its one end and wait till it comes to rest. Does the magnet rest along the same line?

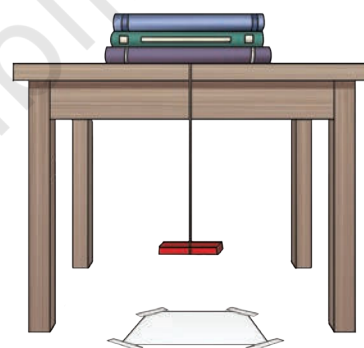


Fig. 4.5: A freely suspended bar magnet



What direction does this line indicate along which the magnet rests? How can we find it out?

If we have noticed the direction where the Sun rises or sets, we have an approximate idea of where East or West is. Hence, we can locate the direction along which the magnet rests.

A freely suspended magnet comes to rest along the north-south direction. The end of the magnet that points towards north direction is called the North-seeking pole or the **North pole of the magnet**. The other end that points towards the South direction is called the South-seeking pole or the **South pole of the magnet**. A freely suspended magnet rests along the north-south direction because our Earth itself behaves like a giant magnet.

Repeat this activity with a small iron bar in place of the bar magnet. What do you observe? Does it always rest along north-south direction? It does not. It can rest along any direction. This implies that only magnets rest along north-south direction. This activity provides us with a way to test whether a piece of metal is a magnet or not.

The property of a freely suspended magnet to always rest along the north-south direction is used to find directions. Based on this, a small device called a magnetic compass was

developed in olden days for finding directions. It has a magnet in the shape of a needle which can rotate freely (Fig. 4.6). The needle of a magnetic compass indicates the north-south direction.

The compass is kept at the place where we wish to know the directions. After some time, the needle comes to rest in the north-south direction. The compass box is then gently rotated until the north and south marked on the dial are aligned with the needle. Now all directions at that place are as indicated on the dial.



Fig. 4.6: A magnetic compass

A magnetic compass is usually a small circular box with a transparent cover on it, as shown in Fig. 4.6. The magnet, in the shape of a needle, is mounted on a pin standing on the bottom of the box. This

needle is balanced on the pin in such a manner that it can move around this point easily, that is, it can rotate freely. The end of the needle which rests in the North direction is usually painted red. Below the needle, there is a dial with directions marked on it.

How can we make our own magnetic compass?



More to know!

Activity 4.4: Let us construct

- ◆ Collect a few materials like a cork piece, iron sewing needle, a permanent bar magnet, a glass bowl, and water.
- ◆ Place the iron sewing needle on a wooden table. Then keep any one pole of the magnet at one end of the needle. Move the magnet over the needle along its length as shown in Fig. 4.7a. When it reaches the other end of the needle, lift it up.
- ◆ Bring the same pole of the magnet you started with to the same end of the sewing needle from which you began, and repeat the previous step. Repeat this process at least 30 to 40 times.
- ◆ Bring some iron filings or steel pins near the needle. If the pins or iron filings get attracted to the needle, then that means that the needle has become a magnet.
- ◆ Pass this needle through the cork horizontally. Float the cork in a glass bowl filled with water, such that the needle always remains above the level of water as shown in Fig. 4.7b.
- ◆ When the needle comes to rest, your magnetic compass is ready for use. Note the direction in which either side of the needle points.
- ◆ Rotate the cork gently and wait till it stops rotating. Repeat this a few more times. Do the ends of the needle always point in the same direction?




Fig. 4.7(a): Making an iron needle a magnet




Fig. 4.7(b): A compass needle in a bowl of water

Much before the widespread use of the modern magnetic compass (Fig. 4.6), a device similar to the compass needle made by you (Fig. 4.7b) was used by Indians for navigation at sea. It consisted of a magnetised fish-shaped iron piece, kept in a vessel of oil. It was called *matsya-yantra* (or *machchh-yantra*).

Do you know?



4.4 Attraction and Repulsion between Magnets

Activity 4.5: Let us experiment

- ◆ Take a pair of bar magnets on which North and South poles have been marked. Mark the two bar magnets as A and B.
- ◆ Place the longer side of magnet A over 5–6 round shaped pencils as shown in Fig. 4.8a.
- ◆ Now bring one end of magnet B near the end of magnet A placed on the pencils. Make sure that the two magnets do not touch each other. Observe what happens.
- ◆ Next, bring the other end of magnet B near the same end of magnet A (Fig. 4.8b). Does the magnet A on the pencils begin to move? Does it always move in the direction of the approaching magnet? What do these observations suggest?

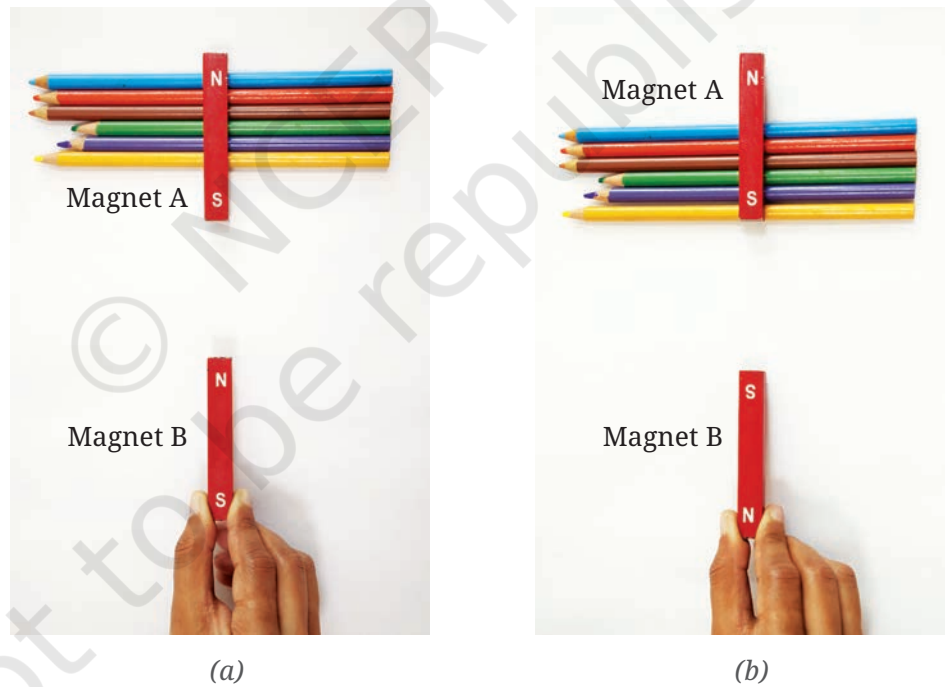


Fig. 4.8: Interaction between two bar magnets

You will see that unlike poles of two magnets, that is, the North pole of one magnet and the South pole of another magnet, attract each other. The like poles, that is, either the North poles or the South poles of both magnets, repel each other.

- ◆ Repeat the activity by using an iron bar in place of one of the magnets. What do you observe this time?

You will find that both the ends of the iron bar will be attracted by both the North and South poles of the magnet. From this activity, we find that a magnet can be identified by its property of repulsion.

Activity 4.6: Let us experiment

- ◆ Take a magnetic compass and a bar magnet.
- ◆ Place the magnetic compass over a horizontal surface and wait for its needle to come to rest.
- ◆ Now slowly bring North pole of the bar magnet close to the North pole of the compass needle as shown in Fig. 4.9a. Observe the compass needle carefully. What do you observe? Does the needle deflect? If yes, in which direction?
- ◆ Now repeat the above step with the South pole of the bar magnet. Do you observe any difference this time?

The compass needle is also a magnet. Will it show the same behaviour if a magnet is brought closer to it?



(a)



(b)

Fig. 4.9: A compass needle and a magnet

When the North pole of a magnet is brought closer to the North pole of the compass needle, it moves away as shown in Fig. 4.9a. When the South pole of the magnet is brought closer to the North pole of the compass needle, it moves closer (Fig. 4.9b).

Suppose we place a piece of wood between the compass needle and the magnet. Will this affect the deflection of the compass needle?



Activity 4.7: Let us investigate



Fig. 4.10: Compass needle and a magnet with a piece of wood in between

- ◆ Repeat the first or second part of Activity 4.6.
- ◆ Without disturbing the bar magnet and magnetic compass, place a piece of wood between them, perpendicular to the table as shown in Fig. 4.10. Observe the compass needle carefully.
- ◆ Is there any effect on the deflection of compass needle due to the piece of wood? Record your observation in Table 4.2.
- ◆ Repeat the process by replacing the piece of wood by a cardboard sheet, thin plastic sheet, and a thin glass sheet.

Table 4.2: Observing the effect of magnet through non-magnetic materials

S. no.	Material placed between the magnet and the compass needle	Observations
1.	Wood	
2.	Cardboard	
3.	Plastic	
4.	Glass	

You would observe that there is no appreciable change in the deflection of the needle when a sheet of any of the above material is placed between the magnet and the compass needle. So, we can **conclude** that the magnetic effect can act through non-magnetic materials.

4.5 Fun with Magnets

After learning about magnets, Reshma was very excited and decided to set up some fun activities using magnets at her school fair. You may try making these yourself and may also think of some more fun ideas.

Can we make a garland? (Fig. 4.11)



Fig. 4.11: Magnetic garland



Magnets can move some objects without touching them! Is that not amazing?

Can we take the steel balls out of the maze by moving a magnet below the cardboard tray? (Fig. 4.12)




Fig. 4.12: Steel balls in a maze

Can we pick out a steel paper clip fallen in water using a magnet, without making our fingers or the magnet wet? (Fig. 4.13)



Fig. 4.13: Steel paperclip in water

Will the two cars speed towards each other or run away from each other when brought closer? (Fig. 4.14)



Fig. 4.14: Two matchbox-magnet cars with like poles of the magnets facing each other



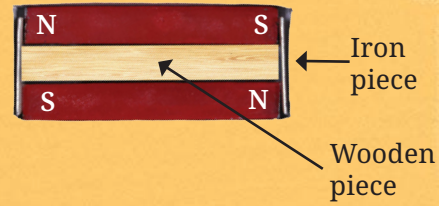
More to know!

In some magnets, the North and South poles are marked as N and S. In some other magnets, the North pole is indicated by a white dot. Sometimes, the North pole of a magnet is painted red and South pole is painted blue.

How to keep the magnets safe?



Magnet says,
“Store me properly. Keep me in pairs with unlike poles on the same side. Keep a piece of wood in between. Place two pieces of soft iron across the ends.”



More to know!

“Do not heat me or drop me or hammer me.

Do not keep me near mobile phones or remote controls.”



Caution
Have fun, but treat magnets with care



Keywords

Attraction

Bar magnet

Magnetic compass

Magnetic materials

Non-magnetic materials

North pole of a magnet

Repulsion

Ring magnet

South pole of a magnet

U-shaped magnet

Conclude

Construct

Experiment

Explore

Investigate

Observe

Predict

Record

Summary

Key Points

- ◆ A magnet has two poles—the North pole and the South pole.
- ◆ The poles of a magnet always exist in pairs. A single North pole or a single South pole cannot exist.
- ◆ Magnetic materials are the materials that are attracted towards a magnet.
- ◆ Non-magnetic materials are the materials that are not attracted towards a magnet.
- ◆ A freely suspended magnet rests along the north-south direction.
- ◆ The needle of a magnetic compass indicates the north-south direction.
- ◆ When two magnets are brought close to each other, like poles (North-North, South-South) repel each other while unlike poles (North-South) attract each other.

Let us enhance our learning



1. Fill in the blanks
 - (i) Unlike poles of two magnets each other, whereas like poles each other.
 - (ii) The materials that are attracted towards a magnet are called
 - (iii) The needle of a magnetic compass rests along the direction.
 - (iv) A magnet always has poles.
2. State whether the following statements are True (T) or False (F).
 - (i) A magnet can be broken into pieces to obtain a single pole. []
 - (ii) Similar poles of a magnet repel each other. []
 - (iii) Iron filings mostly stick in the middle of a bar magnet when it is brought near them. []
 - (iv) A freely suspended bar magnet always aligns with the north-south direction. []

3. Column I shows different positions in which one pole of a magnet is placed near that of the other. Column II indicates the resulting interaction between them for different situations. Fill in the blanks.

Column I	Column II
N – N	-----
N – -----	Attraction
S – N	-----
----- – S	Repulsion

4. Atharv performed an experiment in which he took a bar magnet and rolled it over a heap of steel U-clips (Fig. 4.15).




Fig. 4.15: Bar magnet and heap of steel U-clips

According to you, which of the options given in Table 4.3 is likely to be his observation?

Table 4.3: Number of pins attracted by the magnet at its various positions

	Position A	Position B	Position C
(i)	10	2	10
(ii)	10	10	2
(iii)	2	10	10
(iv)	10	10	10

5. Reshma bought three identical metal bars from the market. Out of these bars, two were magnets and one was just a piece of iron. How will she identify which two amongst the three could be magnets (without using any other material)?
6. You are given a magnet which does not have the poles marked. How can you find its poles with the help of another magnet which has its poles marked?

7. A bar magnet has no markings to indicate its poles. How would you find out near which end its North pole is located without using another magnet?
8. If the earth is itself a magnet, can you guess the poles of earth's magnet by looking at the direction of the magnetic compass?
9. While a mechanic was repairing a gadget using a screw driver, the steel screws kept falling down. Suggest a way to solve the problem of the mechanic on the basis of what you have learnt in this chapter.




Fig. 4.16: Two ring magnets

10. Two ring magnets X and Y are arranged as shown in Fig. 4.16. It is observed that the magnet X does not move down further. What could be the possible reason? Suggest a way to bring the magnet X in contact with magnet Y, without pushing either of the magnets.

11. Three magnets are arranged on a table in the form of the shape shown in Fig. 4.17. What is the polarity, N or S, at the ends 1, 2, 3, 4 and 6 of the magnets? Polarity of one end (5) is given for you.

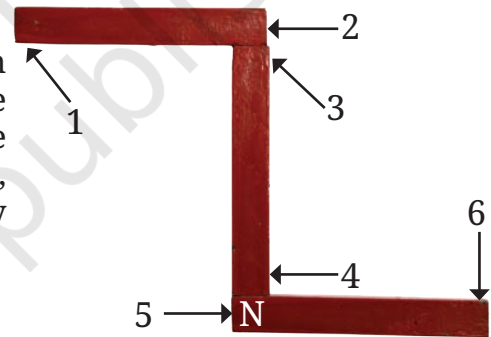


Fig. 4.17: Three bar magnets

Learning further

- ◆ Using 3–4 different magnets, try to lift steel pins or U-clips and check which magnet picks up the largest number of pins. Discuss with your friends why different magnets might have picked up different numbers of pins.
- ◆ Make a toy 'Hopping Frog' as a combined class activity with the help of your teacher. For constructing the toy, fix ring magnets in an alternate North-South fashion along the

length of a scale using glue (Fig. 4.18a). Paint a frog on paper, cut along the outline and glue a ring magnet at its base. Take a transparent, flexible plastic strip (Fig. 4.18a) of a smaller size and glue it to the ring magnet which is attached to the frog.




Fig. 4.18: My hopping frog

When you slide the plastic strip (with frog) over the scale (Fig. 4.18b), you can observe the frog hopping.

- ◆ Find out about the Maglev Train and try to make its model.
- ◆ Try to find out why there is a need to make magnets of different shapes.
- ◆ Collect information related to the use of magnets in the field of medicine.

More to know!

Magnet says “Humans have made me in different shapes and sizes as per their requirements. However, my poles always occur in pairs, no matter my shape”.



Bar Magnet	Disc Magnet	Cylindrical Magnet	Ring Magnet	Spherical Magnet